


GRADE


4

# TIME TRAVEL ADVENTURE

Read • Solve • Master



3:00 PM



## WELCOME, TIME EXPLORER!

Get ready to learn about clocks,  
reading time, AM and PM,  
and solving fun time challenges.

Become a true:

# TIME MASTER!

Read Time



Clock Basics



AM / PM



Word Problems



## LET THE TIME ADVENTURE BEGIN!

Name: \_\_\_\_\_

Grade: \_\_\_\_\_

Date: \_\_\_\_\_




GRADE  
**4**

# MISSION BRIEFING

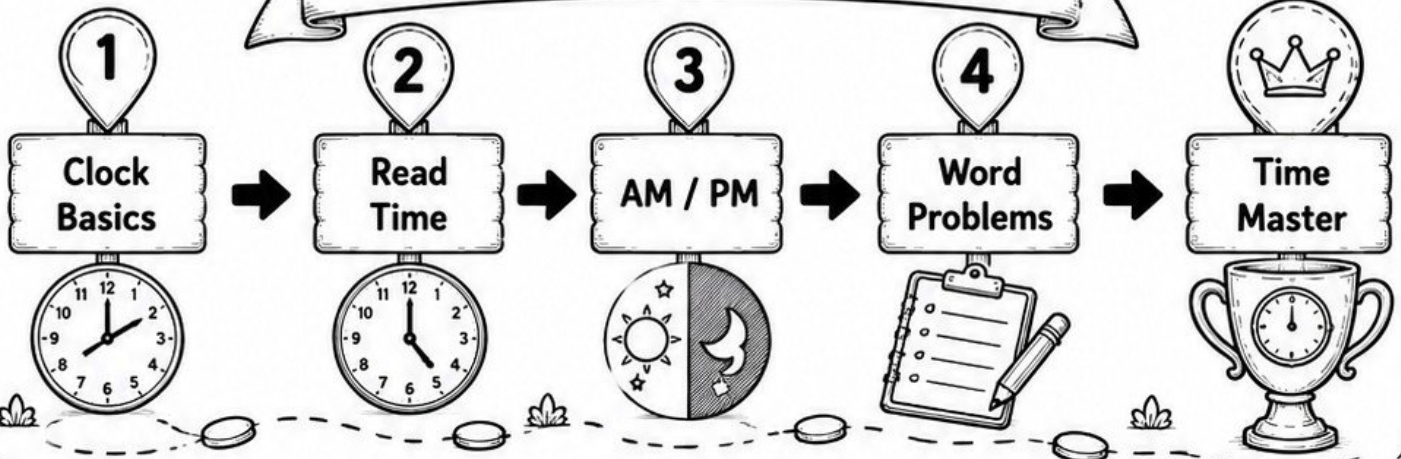
WELCOME,  
TIME EXPLORER!

Learn time step by step  
and complete your  
exciting time travel  
adventure.



A digital clock showing the time 12:00.

## YOUR TIME JOURNEY



## MISSION RULES



1. Read  
carefully



2. Solve  
step by step



3. Check your  
answers



4. Complete every  
challenge



5. Have  
fun



# LESSON PAGE 1 — TIME BASICS

## READING TIME

The short hand shows hours.  
The long hand shows minutes.

**EXAMPLE:**


Clock showing 4:00

Time = 4 o'clock



### ACTIVITY 1 — READ THE CLOCK

Write the time shown below each clock.



### ACTIVITY 2 — WRITE THE TIME


Draw the clock hands to show the time.

2:00

5:00


8:00

11:00



### MINI CHALLENGE

What time is shown?



# LESSON PAGE 2 – ADVANCED TIME

## AM AND PM

AM is morning time.  
PM is afternoon and night time.

Examples:



7:00 AM → Breakfast



7:00 PM → Dinner



### ACTIVITY 1 – WRITE AM OR PM

Write AM or PM for each time.



Wake up at 7:00



Lunch at 1:00



Dinner at 8:00



Sleep at 10:00



### ACTIVITY 2 – WORD PROBLEMS

- School starts at 8:00 AM and ends at 2:00 PM.  
How many hours is school?

Answer: \_\_\_\_\_



- Movie starts at 4:00 PM and ends at 6:00 PM.  
How long is the movie?

Answer: \_\_\_\_\_



- Rahul sleeps at 10:00 PM.  
What time is it after 8 hours?

Answer: \_\_\_\_\_



### FINAL TIME CHALLENGE

What comes 1 hour after 5:00 PM?

5:00 PM

+ 1 hour

\_\_ : \_\_ PM


3



# ANSWER KEY



Congratulations!  
You completed  
Time Travel Adventure.



## SECTION 1: PAGE 3 ANSWERS

### ACTIVITY 1 — READ THE CLOCK



3:00



6:00



9:00



12:00

### ACTIVITY 2 — WRITE THE TIME

2:00

5:00

8:00

11:00



### MINI CHALLENGE



What time is shown?

7:00

## SECTION 2: PAGE 4 ANSWERS

### ACTIVITY 1 — WRITE AM OR PM

Wake up at 7:00



AM



Lunch at 1:00



PM

Dinner at 8:00



PM



Sleep at 10:00



PM

### ACTIVITY 2 — WORD PROBLEMS

1. School starts at 8:00 AM and ends at 2:00 PM.

How many hours is school?

6 hours



2. Movie starts at 4:00 PM and ends at 6:00 PM.

How long is the movie?

2 hours



3. Rahul sleeps at 10:00 PM. What time is it after 8 hours?

6:00 AM



## FINAL TIME CHALLENGE

What comes 1 hour after 5:00 PM?

5:00 PM

+ 1 hour

6:00 PM



# TIME QUEST COMPLETED!

Score: \_\_\_ / \_\_\_

Badge Earned:  
Time Explorer / Time Master